

## Just in Time Quick Check

### Standard of Learning 4.NS.5

#### **Strand:** Number and Number Sense

#### **Standard of Learning 4.NS.5**

The student will reason about the relationship between fractions and decimals (limited to halves, fourths, fifths, tenths, and hundredths) to identify and represent equivalencies.

*Students will demonstrate the following Knowledge and Skills:*

- Represent fractions (proper or improper) and/or mixed numbers as decimals through hundredths, using multiple representations, limited to halves, fourths, fifths, tenths, and hundredths.\*
- Identify and model equivalent relationships between fractions (proper or improper) and/or mixed numbers and decimals, using halves, fourths, fifths, tenths, and hundredths.\*
- Write the decimal and fraction equivalent for a given model (e.g.,  $\frac{1}{4} = 0.25$  or  $0.25 = \frac{1}{4}$ ;  $1.25 = \frac{5}{4}$  or  $1\frac{1}{4}$ ;  $1.02 = \frac{102}{100}$  or  $1\frac{2}{100}$ ).\*

\* On the state assessment, items measuring this objective are assessed without the use of a calculator.

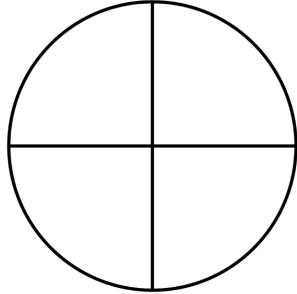
#### Just in Time Quick Check

#### Just in Time Quick Check Teacher Notes


**Supporting and Prerequisite SOL:** 4.NS.3, 4.NS.4, 3.NS.3

**Just in Time Quick Check 4.NS.5**

1. Shade and label the two models to represent an equivalent fraction and decimal. Explain how you know that the fraction and decimal are equivalent.

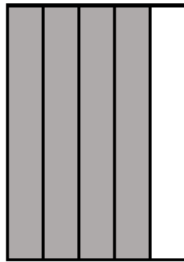


\_\_\_\_\_   
 fraction




\_\_\_\_\_   
 decimal

2. What fraction of Model A is shaded?

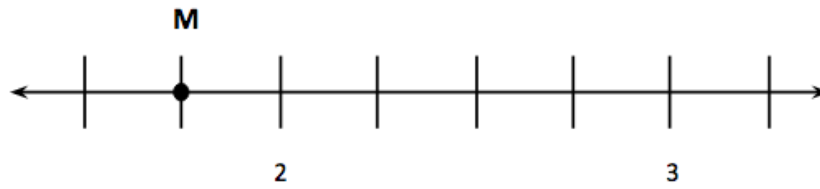


Model A



- a) Shade the decimal grid to represent an equivalent decimal.
- b) Name the decimal.
- c) Explain how you know they are equivalent.

3. What fraction and equivalent decimal best represent the location of point M on the number line?  
Justify your reasoning.



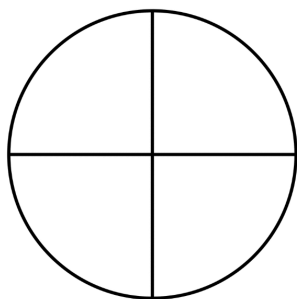
\_\_\_\_\_   
fraction

\_\_\_\_\_   
decimal

#### 4.NS.5 Just in Time Quick Check Teacher Notes


##### Common Errors/Misconceptions and their Possible Indications

1. Shade and label the two models to represent an equivalent fraction and decimal. Explain how you know that the fraction and decimal are equivalent.



\_\_\_\_\_

fraction



\_\_\_\_\_

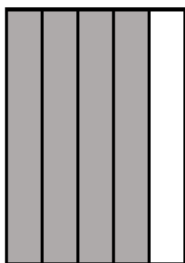
decimal

*A common misconception for some students is thinking of decimals as separate from fractions, rather than recognizing that decimals are another way to represent fractions. Students with this misconception may struggle to relate fraction and decimal models, especially with different sized and/or shaped wholes.*


*Students may benefit from thinking about the hundred grid as the whole for the fraction and then dividing the grid into four equal sections. For example, they may draw a vertical line between the 5<sup>th</sup> and 6<sup>th</sup> columns and a horizontal line between the 5<sup>th</sup> and 6<sup>th</sup> rows. Students could then count to determine that a fourth contains 25 squares. This activity could be repeated to find another fraction-decimal relationship (e.g.,  $\frac{2}{4}$  or  $\frac{3}{4}$ ). These relationships could be reinforced by showing how the decimal can be written as a fraction with a denominator of 100 and then looking at the equivalent fraction relationships.*

*An additional strategy is to provide students with practice opportunities to match fraction and decimal models with different sized and shaped wholes that represent the same amounts. Students may benefit from sorting, matching and comparing pre-shaded fraction and decimal hand-held or virtual picture cards to master this skill.*

2. What fraction of Model A is shaded?



Model A



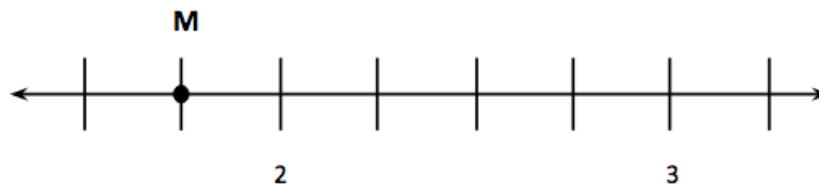
- Shade the decimal grid to represent an equivalent decimal.
- Name the decimal.
- Explain how you know they are equivalent.

*A common error for some students is relying on the method of counting the shaded parts of the whole, without understanding the relationship between the shaded parts and the whole. Students making this error may have the misconception that four shaded sections in one model are equivalent to four shaded sections in another model. These students may not understand that the shaded amount is meaningless unless you know its relationship to the whole. As a result, some students may answer this question by shading four small squares (four hundredths) or four columns (forty hundredths) rather than eight columns (eighty hundredths).*

*Students may benefit from using concrete materials like fraction strips to build fractions involving fifths. They can then find the equivalent fraction in tenths. Once a student knows the equivalent fraction with a denominator of ten, they can use base ten blocks to find the equivalent fraction with a denominator of 100. It may be helpful to then connect the base ten blocks to a hundred grid.*

*Another strategy is to provide students with practice opportunities to fold or cut pictorial representations of fifths into the equivalent fraction in tenths. This helps students see that for every fifth, two tenths are represented, and for every two tenths, one fifth is represented. This can be done with square grids and circular fraction models.*

3. What fraction and equivalent decimal best represent the location of point M on the number line? Justify your reasoning.



\_\_\_\_\_

fraction

\_\_\_\_\_

decimal

*A common error for some students is naming a fraction or decimal without considering the fractional parts that are represented between 2 and 3 on the number line model. These students may not recognize that there are four equal spaces between 2 and 3 (representing fourths). As a result, students may name the point as 1 whole (because 1 comes before 2) or they may randomly choose a fraction that might come right before a whole (e.g., two-thirds, four-fifths, five-sixths). Another possible error is naming the point  $1\frac{1}{2}$  because there are two lines showing before the 2.*

*Students making these errors may benefit from using number lines representing a variety of fractions and counting with fraction pieces to demonstrate that the fractions represented on a number line remain constant over the whole number line. For example, students can be given a number line that is broken into fourths. They begin at 0 and move to the first mark on the number line. As they move to that mark, they place a one-fourth fraction piece on their number line and say one-fourth. They then move to the next mark, place another one-fourth piece, and say two-fourths. This continues through  $\frac{3}{4}$ ,  $\frac{4}{4}$  (whole),  $1\frac{1}{4}$ ,  $1\frac{2}{4}$ , etc.*

*After using the fraction pieces to reinforce the iterative nature of fraction number lines, provide students with practice opportunities to use incomplete number lines and parts of number lines to determine the value of different points on the number line before and after the section where the whole is defined.*