

2016 Mathematics Standards of Learning
Algebra Readiness Formative Assessment

1A.7f

1. Which table of values best represents the following verbal description: a number, y , is equal to nine less than the square of a number, x .

A.

x	y
-2	-13
-1	-10
0	9
1	-8
2	-5

B.

x	y
-2	-5
-1	-8
0	9
1	-8
2	-5

C.

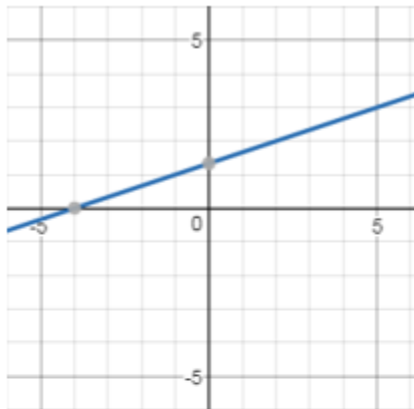
x	y
-2	-11
-1	-10
0	-9
1	-8
2	-11

D.

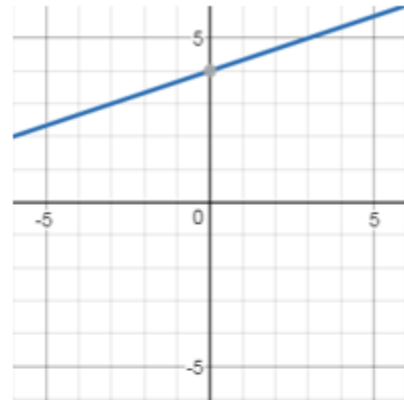
x	y
-2	-5
-1	-8
0	-9
1	-8
2	-5

2. Which graph best represents the following verbal description: four increased by the quotient of a number, x , and 3 is equal to a number, y .

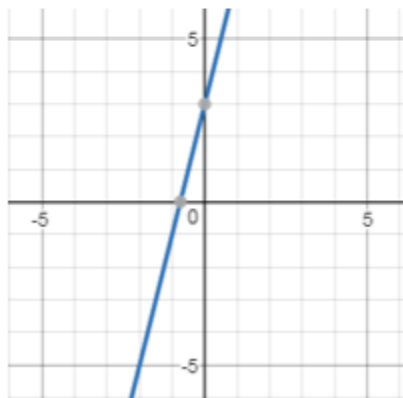
A.



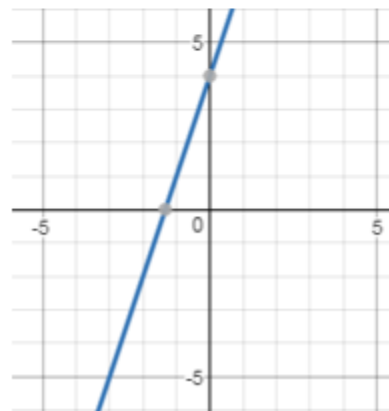
B.



C.



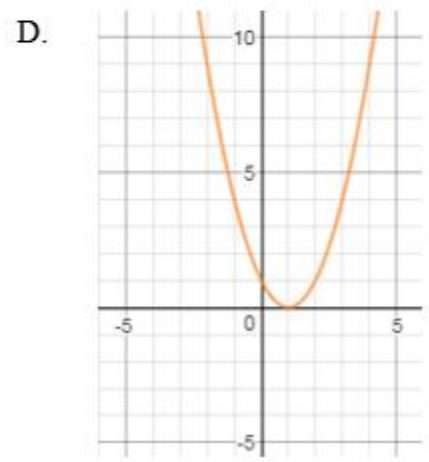
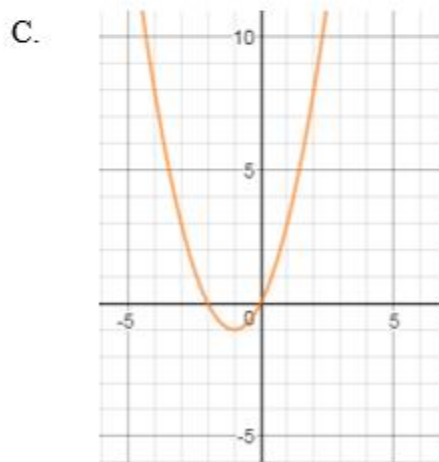
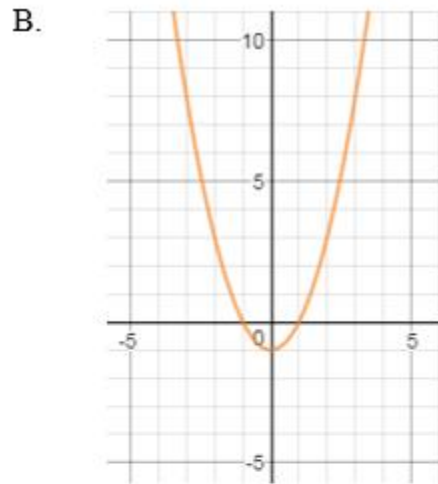
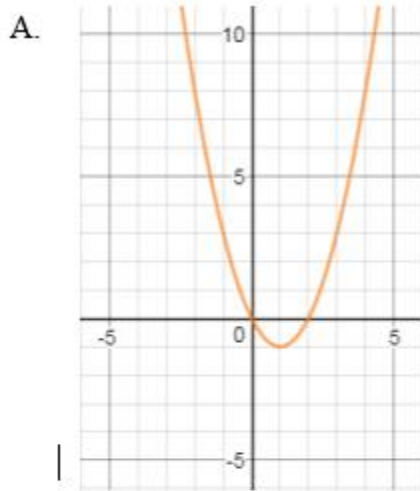
D.



2016 Mathematics Standards of Learning
Algebra Readiness Formative Assessment

3. Which graph best represents the following table of values:

x	y
-2	0
-1	-1
0	0
1	3
2	8



2016 Mathematics Standards of Learning
Algebra Readiness Formative Assessment

4. Which table of values best represents the following linear equation, $3x - 2y = 6$?

A.

x	y
-2	0
-1	$-\frac{3}{2}$
0	3
1	5
2	6

B.

x	y
-2	-6
-1	$-\frac{9}{2}$
0	-3
1	$-\frac{3}{2}$
2	0

C.

x	y
-2	-6
-1	$\frac{9}{2}$
0	3
1	$-\frac{3}{2}$
2	0

D.

x	y
-2	0
-1	$-\frac{3}{2}$
0	-3
1	5
2	6